

# Plus und minus

1

2

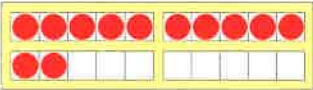


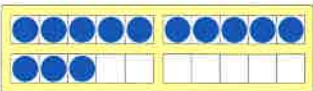
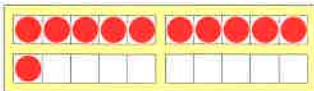
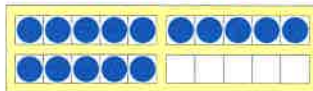

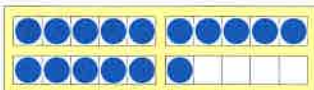

- |             |              |             |              |
|-------------|--------------|-------------|--------------|
| $7 + 2 = 9$ | $8 + 2 = 10$ | $6 + 3 = 9$ | $7 + 3 = 10$ |
| $7 - 2 = 5$ | $8 - 2 = 6$  | $6 - 3 = 3$ | $7 - 3 = 4$  |
| $5 + 3 = 8$ | $4 + 3 = 7$  | $5 + 4 = 9$ | $6 + 4 = 10$ |
| $5 - 3 = 2$ | $4 - 3 = 1$  | $5 - 4 = 1$ | $6 - 4 = 2$  |
| $6 + 2 = 8$ | $8 + 1 = 9$  | $5 + 2 = 7$ | $7 + 1 = 8$  |
| $6 - 2 = 4$ | $8 - 1 = 7$  | $5 - 2 = 3$ | $7 - 1 = 6$  |

1, 1, 2, 2, 3, 3, 4, 4, 5, 6, 6, 7, 7, 7, 8, 8, 8, 9, 9, 9, 9, 10, 10, 10

3 Male an: 5 rot 6 hellblau 7 grün 8 violett 9 orange 10 gelb

4

1

	<u>12</u>		<u>19</u>		<u>17</u>
	<u>13</u>		<u>11</u>		<u>15</u>
	<u>18</u>		<u>16</u>		<u>20</u>

2










1Z 4E = <u>14</u>	1Z 7E = <u>17</u>	1Z 3E = <u>13</u>	1Z 0E = <u>10</u>
1Z 8E = <u>18</u>	1Z 5E = <u>15</u>	1Z 6E = <u>16</u>	2Z 0E = <u>20</u>

3 Welche Zahlen fehlen?

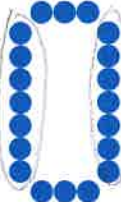








1	2	3	4	5	6	7	8	9	10
11	12	13	14	15	16	17	18	19	20

4 Wie viele Punkte? Erkläre, wie du geschickt zählst.



								
<u>15</u>	<u>13</u>	<u>19</u>	<u>18</u>	<u>15</u>	<u>14</u>	<u>20</u>	<u>17</u>	<u>16</u>

								
<u>20</u>	<u>11</u>	<u>16</u>	<u>15</u>	<u>16</u>	<u>18</u>	<u>18</u>	<u>13</u>	<u>17</u>

# Große und kleine Aufgaben

1 Finde die passende große Aufgabe.

$$2 + 1 = \underline{3}$$

$$12 + 1 = \underline{13}$$

$$4 + 3 = \underline{7}$$

$$14 + 3 = \underline{17}$$

$$5 + 3 = \underline{8}$$

$$15 + 3 = \underline{18}$$

$$4 + 2 = \underline{6}$$

$$14 + 2 = \underline{16}$$

$$7 + 2 = \underline{9}$$

$$17 + 2 = \underline{19}$$

$$1 + 8 = \underline{9}$$

$$10 + 8 = \underline{19}$$

$$6 + 4 = \underline{10}$$

$$16 + 4 = \underline{20}$$

$$1 + 1 = \underline{2}$$

$$11 + 1 = \underline{12}$$

2 Denke an die kleine Aufgabe.

$15 + 1 = \underline{16}$

$11 + 6 = \underline{17}$

$17 + 1 = \underline{18}$

$13 + 7 = \underline{20}$

$16 + 3 = \underline{19}$

$13 + 1 = \underline{14}$

$11 + 7 = \underline{18}$

$18 + 1 = \underline{19}$

$14 + 5 = \underline{19}$

$12 + 3 = \underline{15}$

$18 + 2 = \underline{20}$

$15 + 2 = \underline{17}$

$16 + 1 = \underline{17}$

$16 + 2 = \underline{18}$

$13 + 6 = \underline{19}$

$11 + 9 = \underline{20}$

14, 15, 16, 17, 17, 17, 18, 18, 18, 19, 19, 19, 19, 20, 20, 20

3

	+2	+4	+1	+3	+6
11	13	15	12	14	17
14	16	18	15	17	20

	+3	+5	+7	+2	+4
13	16	18	20	15	17
12	15	17	19	14	16

4 Welche Aufgabe passt zum Schluss?



$12 + 8 = \underline{20}$

$11 + 1 = \underline{12}$

$11 + 5 = \underline{16}$

$14 + 6 = \underline{20}$

$12 + 7 = \underline{19}$

$12 + 2 = \underline{14}$

$13 + 4 = \underline{17}$

$15 + 5 = \underline{20}$

$12 + 6 = \underline{18}$

$13 + 3 = \underline{16}$

$15 + 3 = \underline{18}$

$16 + 4 = \underline{20}$

$12 + 5 = \underline{17}$

$14 + 4 = \underline{18}$

$17 + 2 = \underline{19}$

$17 + 3 = \underline{20}$

$12 + 4 = \underline{16}$

$15 + 5 = \underline{20}$

$19 + 1 = \underline{20}$

$18 + 2 = \underline{20}$



1 Finde die passende große Aufgabe.

$$6 - 1 = \underline{5}$$

$$16 - 1 = \underline{15}$$

$$5 - 2 = \underline{3}$$

$$15 - 2 = \underline{13}$$

$$7 - 5 = \underline{2}$$

$$17 - 5 = \underline{12}$$

$$9 - 6 = \underline{3}$$

$$19 - 6 = \underline{13}$$

$$4 - 3 = \underline{1}$$

$$14 - 3 = \underline{11}$$

$$3 - 3 = \underline{0}$$

$$13 - 3 = \underline{10}$$

$$8 - 7 = \underline{1}$$

$$18 - 7 = \underline{11}$$

$$10 - 3 = \underline{7}$$

$$20 - 3 = \underline{17}$$

2 Denke an die kleine Aufgabe.

$$19 - 1 = \underline{18}$$

$$12 - 2 = \underline{10}$$

$$14 - 1 = \underline{13}$$

$$20 - 2 = \underline{18}$$

$$13 - 2 = \underline{11}$$

$$17 - 1 = \underline{16}$$

$$15 - 3 = \underline{12}$$

$$20 - 6 = \underline{14}$$

$$16 - 4 = \underline{12}$$

$$19 - 8 = \underline{11}$$

$$16 - 5 = \underline{11}$$

$$20 - 7 = \underline{13}$$

$$18 - 5 = \underline{13}$$

$$20 - 4 = \underline{16}$$

$$18 - 8 = \underline{10}$$

$$20 - 9 = \underline{11}$$

10, 10, 11, 11, 11, 11, 12, 12, 13, 13, 13, 14, 16, 16, 18, 18

3

	-4	-2	-1	-3	-6
16	12	14	15	13	10
18	14	16	17	15	12

	-5	-3	-7	-4	-6
17	12	14	10	13	11
19	14	16	12	15	13

4 Welche Aufgabe passt zum Schluss?



$$19 - 2 = \underline{17}$$

$$15 - 1 = \underline{14}$$

$$12 - 1 = \underline{11}$$

$$18 - 6 = \underline{12}$$

$$18 - 2 = \underline{16}$$

$$15 - 2 = \underline{13}$$

$$14 - 2 = \underline{12}$$

$$17 - 5 = \underline{12}$$

$$17 - 2 = \underline{15}$$

$$15 - 3 = \underline{12}$$

$$16 - 3 = \underline{13}$$

$$16 - 4 = \underline{12}$$

$$16 - 2 = \underline{14}$$

$$15 - 4 = \underline{11}$$

$$18 - 4 = \underline{14}$$

$$15 - 3 = \underline{12}$$

$$15 - 2 = \underline{13}$$

$$15 - 5 = \underline{10}$$

$$20 - 5 = \underline{15}$$

$$14 - 2 = \underline{12}$$

1

5 Schritte vor



+5



$13 + 5 = 18$

$13 + 3 = 16$

$13 + 1 = 14$

$13 + 6 = 19$

$13 + 4 = 17$

$13 + 0 = 13$

$13 + 2 = 15$

$13 + 7 = 20$

2

$11 + 9 = 20$

$12 + 7 = 19$

$14 + 4 = 18$

$16 + 4 = 20$

$11 + 5 = 16$

$12 + 3 = 15$

$14 + 2 = 16$

$18 + 2 = 20$

$11 + 7 = 18$

$12 + 5 = 17$

$14 + 3 = 17$

$15 + 5 = 20$

2, 2, 3, 3, 4, 4, 5, 5, 5, 7, 7, 9

3

$17 - 6 = 11$

$18 - 4 = 14$

6 Schritte zurück



-6

$17 - 2 = 15$

$18 - 2 = 16$

$17 - 5 = 12$

$18 - 5 = 13$

$17 - 7 = 10$

$18 - 0 = 18$



4

$19 - 5 = 14$

$16 - 4 = 12$

$14 - 3 = 11$

$20 - 8 = 12$

$12 - 1 = 11$

$19 - 6 = 13$

$17 - 3 = 14$

$17 - 4 = 13$

$16 - 3 = 13$

$14 - 0 = 14$

$13 - 1 = 12$

$19 - 4 = 15$

0, 1, 1, 3, 3, 3, 4, 4, 4, 5, 6, 8

5

